


1. Ota koupil 1 kg pomerančů za 20 Kč a 1 kg jablek za 9 Kč.

Kolik korun zaplatil za nákup?



20 Kč



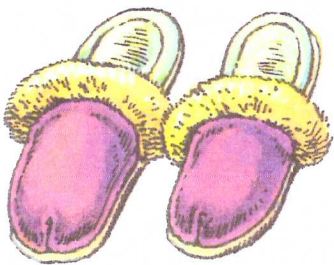
9 Kč

20	+	9	=	
----	---	---	---	--

Ota zaplatil za nákup Kč.

2. Věra si koupila pantofle za 50 Kč a míček za 8 Kč.

Kolik korun zaplatila celkem?



50 Kč




8 Kč

Věra zaplatila celkem Kč.


3. Babička zaplatila za ořechy 30 Kč a za jednu papriku 6 Kč.

Kolik korun zaplatila za nákup?



30 Kč

6 Kč



Babička zaplatila za nákup Kč

4. Rozlož podle vzoru a napiš.

49 Kč	28 Kč	15 Kč	51 Kč	33 Kč	69 Kč	72 Kč	96 Kč
40 Kč	9 Kč						

Proč delfin nemusí pít?

A	O	D	V	U	Í
$80+14$	$56+12$	$56-9$	$50-18$	$93-8$	$50-21$


S	Z	K	Á	R	B
$35+18$	$65-30$	$91-5$	$76-28$	$72-8$	$29+8$

Y	CH	T	N	C	I
$96-7$	$98-6$	$29+7$	$64+12$	$100-82$	$75-29$

—	—	—	—	—	—	—	—	—
32	68	47	85	35	29	53	86	48

—	—	—	—	—
35	64	89	37	94

—	—	—	—	—	—	—	—
92	68	37	68	36	76	46	18



Jaký sníh taje rychleji - bílý nebo špinavý?

A	P	I	N	J	E
5.7	8.8	7.6	9.5	81:9	42:7
Y	T	Í	Š	V	Ý
42:6	3.9	3.8	7.9	5.8	7.7
R	CH	L	H	S	
45:9	28:7	6.6	48:6	9.8	

63	64	42	45	35	40	49		
72	45	24	8		27	35	9	6
5	7	4	36	6	9	42		



Kolik zubů mají sloni?


Z	K	O	R	U	B
9.8	8.7	3.7	3.8	49:7	6.8
M	Ů	L	A	Í	J
9.9	7.9	3.9	8.8	18:6	81:9
Ě	4	Y			
5.6	4.3	64:8			

— — — — —
56 24 21 81 30





— — —
56 27 63

— — — —
81 64 9 3


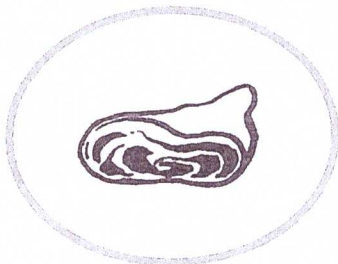



— — — — —
12 72 7 48 8



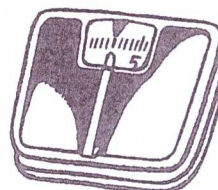
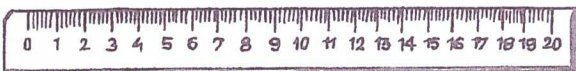
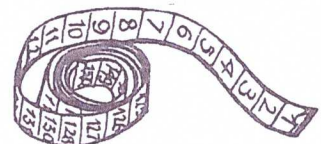
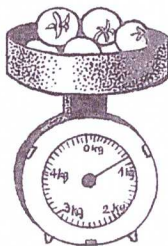
1. Spoj s rámečkem, co měříme na metry.
2. Řekni, co kde kupujeme.




m



3. Vybarvi předměty, kterými měříme.



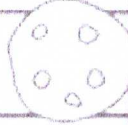






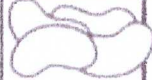
























Name: _____

Sweet Surprise

Directions: Color each sweet treat and find out what number is behind it on the number chart. Write the missing numbers on the boxes below.

1	2	3	4	5		7	8	9	
11		13	14	15	16	17	18	19	20
21	22	23		25	26	27		29	30
31	32	33	34	35		37	38	39	40
41	42		44	45	46	47	48	49	50
51	52	53	54	55	56	57	58		60
	62	63	64		66	67	68	69	70
71	72	73	74	75	76		78	79	
81	82	83		85	86	87	88	89	90
91		93	94	95	96	97		99	100

Write the missing numbers.

							
<input type="text"/>	<input type="text"/>	<input type="text"/>	<input type="text"/>	<input type="text"/>	<input type="text"/>	<input type="text"/>	<input type="text"/>
							
<input type="text"/>	<input type="text"/>	<input type="text"/>	<input type="text"/>	<input type="text"/>	<input type="text"/>	<input type="text"/>	