

Vypočítej

$10 + 5 = \underline{\quad}$

$10 + 8 = \underline{\quad}$

$11 + 6 = \underline{\quad}$

$13 + 5 = \underline{\quad}$

$12 + 8 = \underline{\quad}$

$16 + 3 = \underline{\quad}$

$12 + 4 = \underline{\quad}$

$15 + 3 = \underline{\quad}$

$17 + 3 = \underline{\quad}$

$18 + 2 = \underline{\quad}$

$19 + 1 = \underline{\quad}$

$14 + 3 = \underline{\quad}$

$11 + 8 = \underline{\quad}$

$10 + 5 = \underline{\quad}$

$16 + 3 = \underline{\quad}$

$17 + 2 = \underline{\quad}$

$19 + 1 = \underline{\quad}$

$20 + 0 = \underline{\quad}$

$20 - 7 = \underline{\quad}$

$19 - 6 = \underline{\quad}$

$20 - 8 = \underline{\quad}$

$17 - 4 = \underline{\quad}$

$16 - 5 = \underline{\quad}$

$14 - 3 = \underline{\quad}$

$20 - 9 = \underline{\quad}$

$19 - 1 = \underline{\quad}$

$18 - 3 = \underline{\quad}$

$16 - 5 = \underline{\quad}$

$14 - 4 = \underline{\quad}$

$13 - 2 = \underline{\quad}$

$19 - 7 = \underline{\quad}$

$18 - 5 = \underline{\quad}$

$16 - 3 = \underline{\quad}$

$11 - 1 = \underline{\quad}$

$14 - 1 = \underline{\quad}$

$15 - 2 = \underline{\quad}$

$13 + 4 = \underline{\quad}$

$17 - 4 = \underline{\quad}$

$12 + 8 = \underline{\quad}$

$20 - 8 = \underline{\quad}$

$19 + 1 = \underline{\quad}$

$20 - 1 = \underline{\quad}$

$15 + 5 = \underline{\quad}$

$20 - 5 = \underline{\quad}$

$14 + 3 = \underline{\quad}$

$17 - 3 = \underline{\quad}$

$11 + 6 = \underline{\quad}$

$11 - 1 = \underline{\quad}$

$20 - 5 = \underline{\quad}$

$20 - 8 = \underline{\quad}$

$19 + 1 = \underline{\quad}$

$20 - 7 = \underline{\quad}$

$15 - 5 = \underline{\quad}$

$20 - 3 = \underline{\quad}$

Vypočítej

$1 + 1 + 3 = \underline{\quad}$

$2 + 2 + 2 = \underline{\quad}$

$3 + 2 + 4 = \underline{\quad}$

$5 + 2 + 1 = \underline{\quad}$

$7 + 1 + 2 = \underline{\quad}$

$6 + 3 + 1 = \underline{\quad}$

$1 + 5 + 4 = \underline{\quad}$

$3 + 2 + 5 = \underline{\quad}$

$10 + 5 + 3 = \underline{\quad}$

$10 + 1 + 9 = \underline{\quad}$

$10 + 6 + 3 = \underline{\quad}$

$10 + 1 + 5 = \underline{\quad}$

$12 + 2 + 5 = \underline{\quad}$

$13 + 3 + 6 = \underline{\quad}$

$16 + 2 + 2 = \underline{\quad}$

$18 + 2 + 0 = \underline{\quad}$

$11 + 2 - 1 = \underline{\quad}$

$14 + 3 - 7 = \underline{\quad}$

$16 + 4 - 5 = \underline{\quad}$

$12 + 2 - 2 = \underline{\quad}$

$14 - 4 + 8 = \underline{\quad}$

$13 + 7 - 6 = \underline{\quad}$

$10 + 10 - 1 = \underline{\quad}$

$5 + 3 - 5 = \underline{\quad}$

Napiš, kolik je to korun

  = Kčs

    = Kčs

 = Kčs

  = Kčs

  = Kčs





   = Kčs

   = Kčs

   = Kčs

   = Kčs

    = Kčs















1. Kolik stojí mýdlo? Kčs


2. Kolik stojí hřeben? Kčs

3. Co je nejlevnější - zapiš Kčs

4. Co je nejdražší - zapiš Kčs

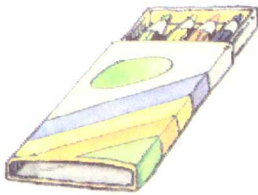
V penězence máš	Nákup	Kolik ti zůstane?
	 10,- Kčs	<div style="border: 1px solid black; display: flex; justify-content: space-around; align-items: center; width: 100%; height: 40px;"> - = </div>
	 5,- Kčs	<div style="border: 1px solid black; display: flex; justify-content: space-around; align-items: center; width: 100%; height: 40px;"> - = </div>
	 10,- Kčs	<div style="border: 1px solid black; display: flex; justify-content: space-around; align-items: center; width: 100%; height: 40px;"> - = </div>
	 2,- Kčs	<div style="border: 1px solid black; display: flex; justify-content: space-around; align-items: center; width: 100%; height: 40px;"> - = </div>
	 5,- Kčs	<div style="border: 1px solid black; display: flex; justify-content: space-around; align-items: center; width: 100%; height: 40px;"> - = </div>
	 6,- Kčs	<div style="border: 1px solid black; display: flex; justify-content: space-around; align-items: center; width: 100%; height: 40px;"> - = </div>

Napiš, kolik bude stát nákup



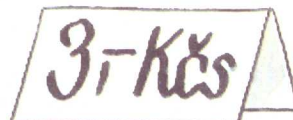
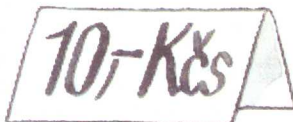

Kčs

	+		=	
--	---	--	---	--



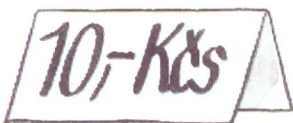

Kčs

	+		=	
--	---	--	---	--



Kčs

	+		=	
--	---	--	---	--



Kčs

	+		=	
--	---	--	---	--


Vypočítej



5	+	3	=	
---	---	---	---	--



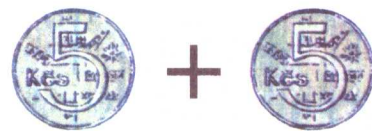
	+		=	
--	---	--	---	--



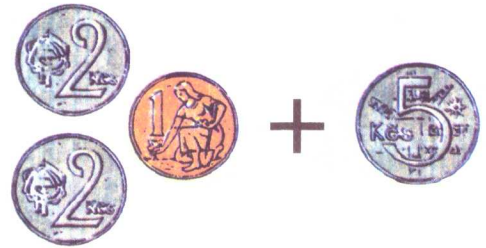
4	+	5	=	
---	---	---	---	--




	+		=	
--	---	--	---	--



5	+	5	=	
---	---	---	---	--




	+		=	
--	---	--	---	--



4	+	4	=	
---	---	---	---	--



	+		=	
--	---	--	---	--



3	+	4	=	
---	---	---	---	--



	+		=	
--	---	--	---	--

Vypočítej



$10 - 5 = \square$



$10 - 2 = \square$



$8 - 3 = \square$



$10 - 6 = \square$



$6 - 2 = \square$



$8 - 2 = \square$



$8 - 4 = \square$



$7 - 1 = \square$



$9 - 4 = \square$

$9 - 5 = \square$