

Matematika

Name \_\_\_\_\_

Date \_\_\_\_\_



Add the numbers  
Print the answer under the line

$$\begin{array}{r} 206 \\ +541 \\ \hline \end{array}$$

$$\begin{array}{r} 634 \\ +101 \\ \hline \end{array}$$

$$\begin{array}{r} 218 \\ +231 \\ \hline \end{array}$$

$$\begin{array}{r} 421 \\ +124 \\ \hline \end{array}$$

$$\begin{array}{r} 202 \\ +641 \\ \hline \end{array}$$

$$\begin{array}{r} 665 \\ +123 \\ \hline \end{array}$$

$$\begin{array}{r} 314 \\ +522 \\ \hline \end{array}$$

$$\begin{array}{r} 610 \\ +272 \\ \hline \end{array}$$

$$\begin{array}{r} 710 \\ +140 \\ \hline \end{array}$$

$$\begin{array}{r} 544 \\ +222 \\ \hline \end{array}$$

$$\begin{array}{r} 889 \\ +100 \\ \hline \end{array}$$

$$\begin{array}{r} 388 \\ +511 \\ \hline \end{array}$$

$$\begin{array}{r} 623 \\ +243 \\ \hline \end{array}$$

$$\begin{array}{r} 581 \\ +210 \\ \hline \end{array}$$

$$\begin{array}{r} 481 \\ +204 \\ \hline \end{array}$$

$$\begin{array}{r} 153 \\ +516 \\ \hline \end{array}$$

$$\begin{array}{r} 801 \\ +158 \\ \hline \end{array}$$

$$\begin{array}{r} 243 \\ +421 \\ \hline \end{array}$$

$$\begin{array}{r} 127 \\ +351 \\ \hline \end{array}$$









$$\begin{array}{r} 755 \\ +113 \\ \hline \end{array}$$









# Manipulace s penězi

Spočítej, kolik korun mají děti na svačinu.

Řekni, kdo má nejvíce korun a kdo nejméně.

		60 Kč
		
		90 Kč
		

3. Vypočítej, kolik korun zaplatíš za svačinu.

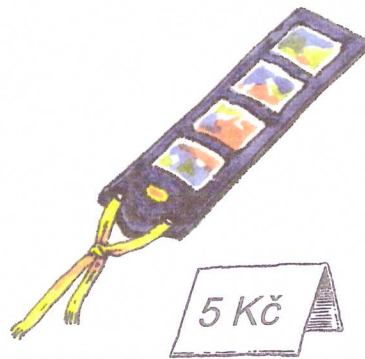
					
30 Kč	10 Kč	20 Kč	20 Kč	10 Kč	10 Kč
30 + 10 =	20 + 20 =	10 + 10 =			

4. Přečti a připrav na cvičných penězích.

30 Kč	70 Kč	90 Kč	50 Kč	40 Kč
-------	-------	-------	-------	-------





Připrav na cvičných penězích, kolik korun zaplatíš za tyto nákupy, vypočítej.



54	+	5	=	
----	---	---	---	--


71	+	8	=	
----	---	---	---	--

71 Kč



8 Kč

3.



32	+	8	=	
----	---	---	---	--

4. Spočítej, kolik je to korun.

--	--	--



V peněžence máš	Nákup	Kolik ti zůstane?
40 Kčs		<input type="text"/> - <input type="text"/> = <input type="text"/>
70 Kčs		<input type="text"/> - <input type="text"/> = <input type="text"/>
20 Kčs		<input type="text"/> - <input type="text"/> = <input type="text"/>
100 Kčs		<input type="text"/> - <input type="text"/> = <input type="text"/>
60 Kčs		<input type="text"/> - <input type="text"/> = <input type="text"/>
30 Kčs		<input type="text"/> - <input type="text"/> = <input type="text"/>
80 Kčs		<input type="text"/> - <input type="text"/> = <input type="text"/>






	A	B	C	D
1	$32 + 60 =$	$68 - 30 =$	$30 + 36 =$	$78 - 40 =$
	$46 + 30 =$	$72 - 40 =$	$40 + 42 =$	$93 - 50 =$
	$52 + 40 =$	$95 - 50 =$	$60 + 38 =$	$54 - 50 =$
	$78 + 10 =$	$36 - 20 =$	$50 + 42 =$	$87 - 30 =$
	$56 + 20 =$	$57 - 40 =$	$40 + 58 =$	$96 - 60 =$
2	$68 - 20 =$	$40 + 58 =$	$72 - 30 =$	$32 + 60 =$
	$92 - 30 =$	$60 + 35 =$	$93 - 50 =$	$67 + 20 =$
	$78 - 40 =$	$30 + 53 =$	$85 - 40 =$	$81 + 10 =$
	$43 - 30 =$	$40 + 48 =$	$78 - 30 =$	$36 + 30 =$
	$28 - 20 =$	$80 + 16 =$	$95 - 60 =$	$45 + 30 =$
3	$60 + 32 =$	$78 - 70 =$	$42 + 10 =$	$91 - 80 =$
	$30 + 48 =$	$63 - 30 =$	$57 + 30 =$	$57 - 30 =$
	$20 + 62 =$	$55 - 40 =$	$48 + 20 =$	$38 - 20 =$
	$70 + 15 =$	$42 - 40 =$	$23 + 60 =$	$73 - 40 =$
	$40 + 48 =$	$96 - 80 =$	$67 + 30 =$	$45 - 40 =$
4	$72 - 60 =$	$62 + 30 =$	$65 - 30 =$	$30 + 61 =$
	$63 - 30 =$	$33 + 50 =$	$37 - 30 =$	$60 + 36 =$
	$85 - 40 =$	$42 + 40 =$	$84 - 40 =$	$40 + 48 =$
	$97 - 50 =$	$78 + 10 =$	$73 - 40 =$	$50 + 42 =$
	$78 - 60 =$	$82 + 10 =$	$58 - 20 =$	$70 + 28 =$



47



83

---

(10)	(2)	(5)	(50)	(5)	(1)	(5)	(10)	(1)	(2)
(50)	(1)	(20)	(10)	(2)	(2)	(5)	(20)	(20)	(1)