

1. Vypočítej příklady a najdi rybu se správným výsledkem. Spoj čarou.

$12 + 4 =$

$40 + 30 =$

$10 + 50 =$

$90 - 50 =$

$18 - 5 =$

$20 + 70 =$

$11 + 4 =$


$80 - 50 =$

$17 - 6 =$

$100 - 50 =$

$20 - 2 =$

$15 + 5 =$



2. Přičti 2 a napiš výsledek.

	44	36	28	17	51	72	95	63	87	18	10
+ 2	46	38									

3. Odečti 2 a napiš výsledek.

	36	27	59	48	12	65	83	96	24	79	85
- 2	34	25									

4. Dej do kroužku větší číslo.

15	19	37	12	100	99	63	71
42	62	85	58	34	32	93	98

1. Pokračuj v psaní číselné řady.

41	42	43	44					
65	66	67						
72	73							
89								


2. Doplň číselné řady.

31		33
58		60
42		44
76		78

25		27
63		65
80		82
95		97

	47	
	30	
	83	
	90	

3. Rozděl a dopiš číslice.

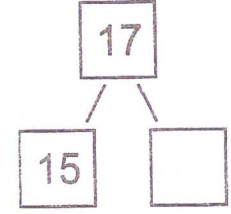
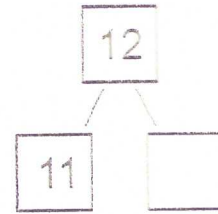
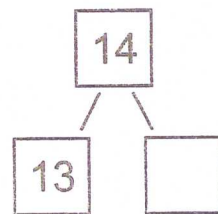

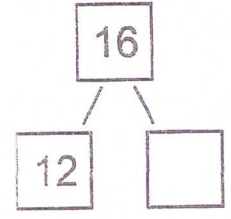
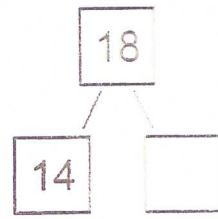
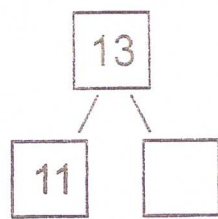
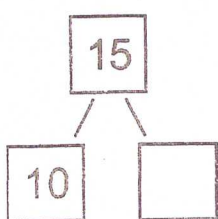


8	
5	3


2	

4	

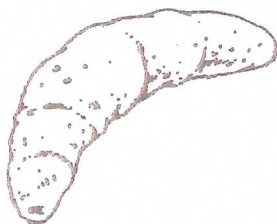
4. Dopiš rozklad.



1. Vypočítej, kolik peněz utratíš za nákup.




+



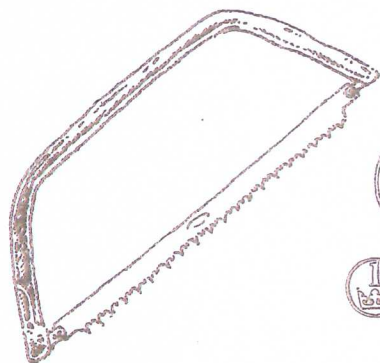
22	+	2	=	
----	---	---	---	--




+



	+		=	
--	---	--	---	--



+



	+		=	
--	---	--	---	--



+



	+		=	
--	---	--	---	--

2. Vypočítej.


$$30 \text{ Kč} + 6 \text{ Kč} = \underline{\quad\quad} \text{ Kč}$$

$$26 \text{ Kč} + 3 \text{ Kč} = \underline{\quad\quad} \text{ Kč}$$

$$90 \text{ Kč} + 4 \text{ Kč} = \underline{\quad\quad} \text{ Kč}$$

$$65 \text{ Kč} + 3 \text{ Kč} = \underline{\quad\quad} \text{ Kč}$$


1. V krejčovské dílně mají 31 krátkých zipů a 8 dlouhých zipů. Kolik zipů mají celkem?



$$\boxed{} + \boxed{} = \boxed{}$$

V dílně mají celkem zipů.


2. V obchodě mají 53 prstenů s kamínkem a 6 prstenů bez kamínku. Kolik prstenů mají celkem?



$$\boxed{} + \boxed{} = \boxed{}$$

V obchodě mají celkem prstenů.

3. V posilovně mají 24 činek lehčích a 6 činek těžších. Kolik činek mají celkem?



$$\boxed{} + \boxed{} = \boxed{}$$

V posilovně mají celkem činek.





4. Pan Valtr koupil na sadbu 45 kg zeminy a 5 kg rašeliny. Kolik kg zeminy a rašeliny koupil celkem?




$$\boxed{} + \boxed{} = \boxed{}$$

Pan Valtr koupil zeminy a rašeliny celkem kg.

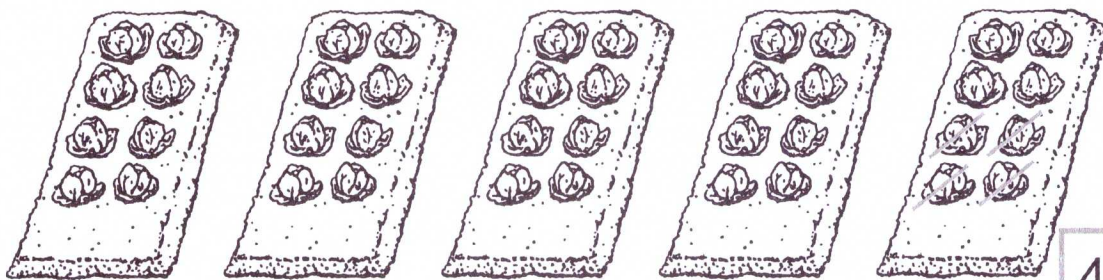
5. Najdi správný příklad a vybarvi ho




1. Vypočítej.




$$32 - 2 =$$



$$48 - 4 =$$



$$35 - 2 =$$



$$26 - 6 =$$

2. Ukazuj na počítadle a vypočítej.

$$48 - 8 = \underline{\quad}$$

$$74 - 4 = \underline{\quad}$$

$$62 - 2 = \underline{\quad}$$

$$96 - 6 = \underline{\quad}$$

$$37 - 5 = \underline{\quad}$$

$$85 - 3 = \underline{\quad}$$

$$46 - 4 = \underline{\quad}$$

$$29 - 7 = \underline{\quad}$$


$$36 - 6 = \underline{\quad}$$

$$27 - 3 = \underline{\quad}$$


$$51 - 1 = \underline{\quad}$$

$$78 - 7 = \underline{\quad}$$

1. Spoj s rámečkem, co měříme na metry.
2. Řekni, co kde kupujeme.



3. Vybarvi předměty, kterými měříme.











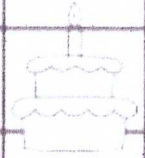








Name: _____

Sweet Surprise

Directions Color each sweet treat and find out what number is behind it on the number chart. Write the missing numbers on the boxes below.

1	2	3	4	5		7	8	9	
11		13	14	15	16	17	18	19	20
21	22	23		25	26	27		29	30
31	32	33	34	35		37	38	39	40
41	42		44	45	46	47	48	49	50
51	52	53	54	55	56	57	58		60
	62	63	64		66	67	68	69	70
71	72	73	74	75	76		78	79	
81	82	83		85	86	87	88	89	90
91		93	94	95	96	97		99	100

Write the missing numbers.